

Foreign Exchange Activity Worksheet

Conduct some online research to find the answers to the following questions.

1. How many countries use the euro as a currency? _____
2. What is the block of countries that use the euro also known as?

3. Approximately how many countries in the world use the dollar as a currency?

4. Name **three** of these countries. i. _____ ii. _____
iii. _____











Foreign Exchange Worksheet – Q5 & Q6






C \$15
 US \$65
 Mex \$600
 US \$5
 £25
 CHF 22
 R 2,000
 RUB 900
 ¥39
 ¥400
 NZ \$18
 AUS \$450

	Round the world ticket €3,000
	Travel insurance €700

5. You are planning a trip around the world and have mapped out the countries that you would like to visit as well as examples of the items that you intend to buy. You need to know how much this trip will cost you in euro so that you can budget the amount of money that you will need.

Examine the accompanying map and complete the table below. Don't forget that you must show your workings for each calculation.

Item	Country	Currency & Symbol	Exchange Rate	Euro Conversion
				
				
				
				
				
				
				
				

Item	Country	Currency & Symbol	Exchange Rate	Euro Conversion
				
				
				
				
				

6. Calculate the total cost of the round the world trip. Show your workings.